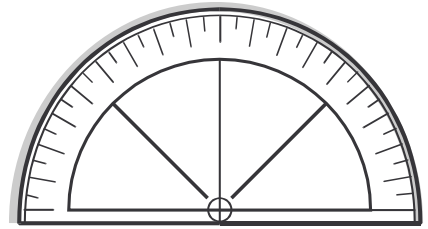


Name: _____ Date: _____

Teacher: _____ Class: _____

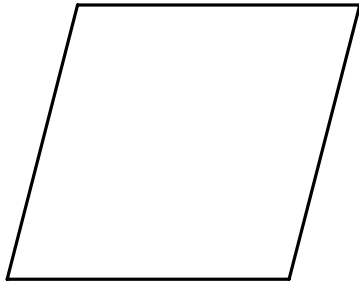
Polygons

When do doctors get angry? When they run out of patients!




Identify the polygons and calculate the number of sides and vertices.

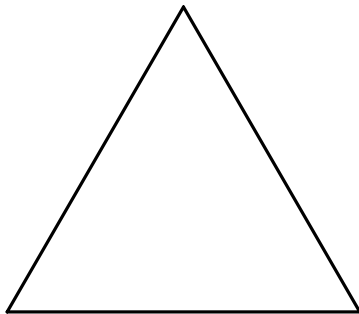
1. _____



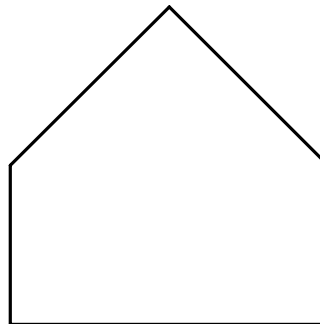
2. _____



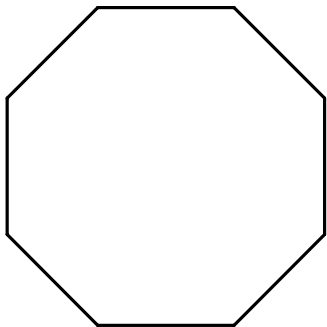
3. _____



4. _____



5. _____



6. _____



Answer Key

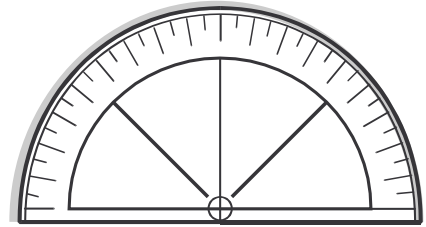
Date: _____

Teacher: _____

Class: _____

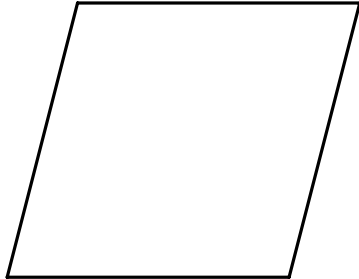
Polygons

When do doctors get angry? When they run out of patients!



Identify the polygons and calculate the number of sides and vertices.

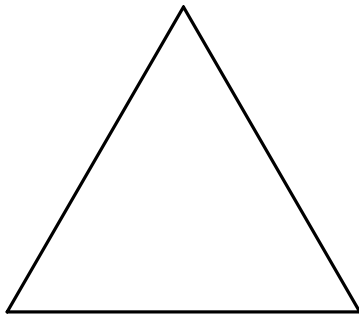
1. Rhombus S=4 V=4



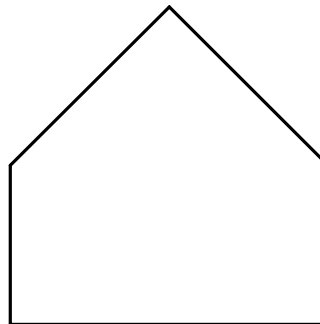
2. Rectangle S=4 V=4



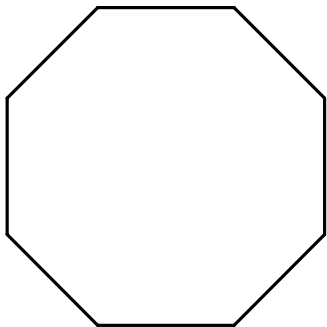
3. Equilateral Triangle S=3 V=3



4. Pentagon S=5 V=5



5. Octagon S=8 V=8



6. Parallelogram S=4 V=4

