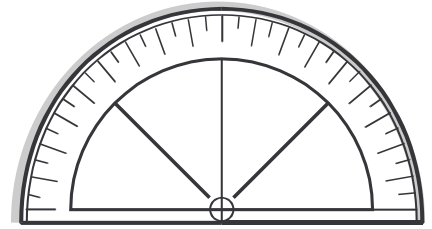


Name: _____ Date: _____

Teacher: _____ Class: _____

Angles

What do you get when you put a turtle and a helicopter together? A Shellicopter.

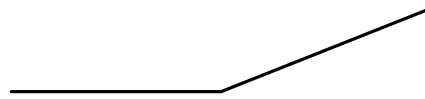


Classify and measure the angles.

1. _____

2. _____

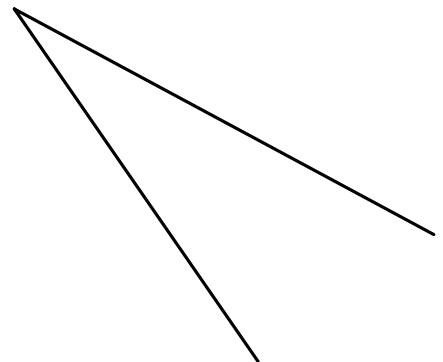
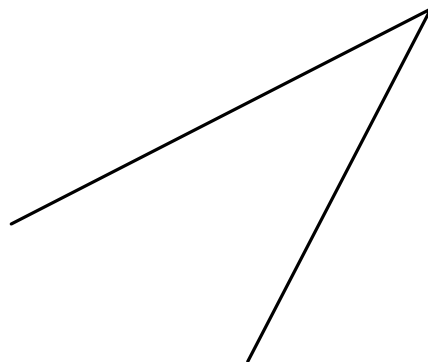
3. _____



4. _____

5. _____


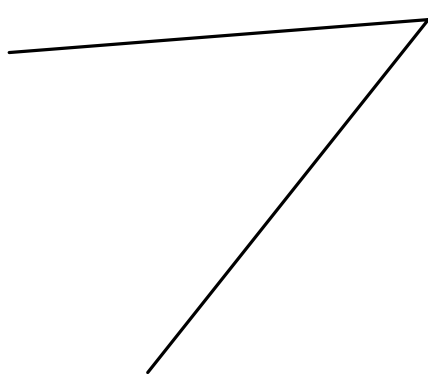
6. _____



7. _____

8. _____

9. _____



Answer Key

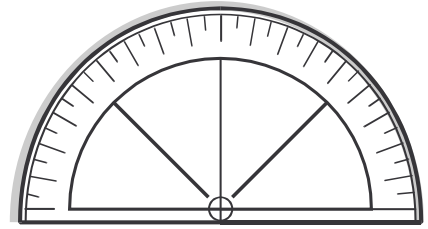
Date: _____

Teacher: _____

Class: _____

Angles

What do you get when you put a turtle and a helicopter together? A Shellicopter.

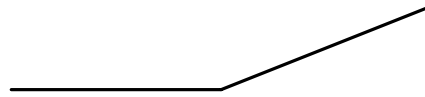


Classify and measure the angles.

1. 96° Obtuse

2. 158° Obtuse

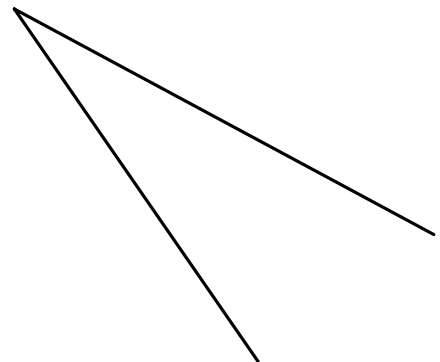
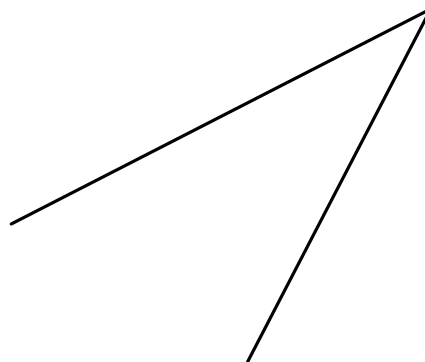
3. 168° Obtuse



4. 90° Right

5. 35° Acute

6. 27° Acute



7. 46° Acute

8. 11° Acute

9. 90° Right

